

1 Find the value of P.

$$\begin{array}{r}
 \text{P Q R S T} \\
 \times \quad \quad \quad 8 \\
 \hline
 1 \ 2 \ 3 \ 4 \ 5 \ 6
 \end{array}$$

- (A) 3 (B) 2 (C) 1 (D) 8

2 How many '1' s are used in all the page numbers of a 111 page book?

- (A) 36 (B) 42 (C) 24 (D) 15

3 4 girls and 2 boys shared 204 stickers equally. How many stickers would 3 girls and 5 boys receive?

- (A) 240 (B) 272 (C) 204 (D) 170

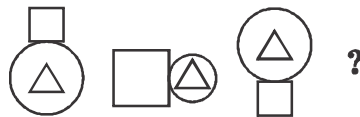
4 It takes 3 hours and 45 minutes to travel from Town A to Town B. John started his journey at 11: 45 a.m. from Town A. At what time would he arrive at Town B?

- (A) 3: 30 p.m. (B) 3: 45 p.m.
 (C) 2: 45 p.m. (D) 2: 00 p.m.

5 Hasini had ₹ 548. How much more money would she need if she wanted to buy 2 bags at ₹ 356 each?

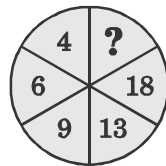
- (A) ₹ 164 (B) ₹ 192 (C) ₹ 712 (D) ₹ 904

6 → What comes next in the given pattern?



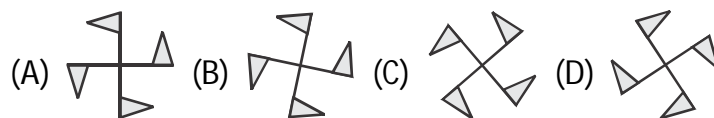
- (A) (B) (C) (D)

7 → Find the missing number in the circle.

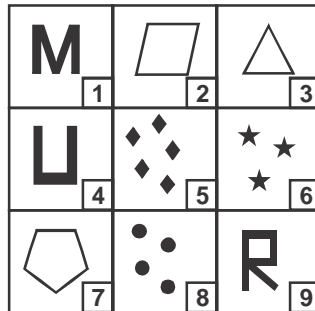


- (A) 20 (B) 18 (C) 24 (D) 28

8 → Identify the odd one out.

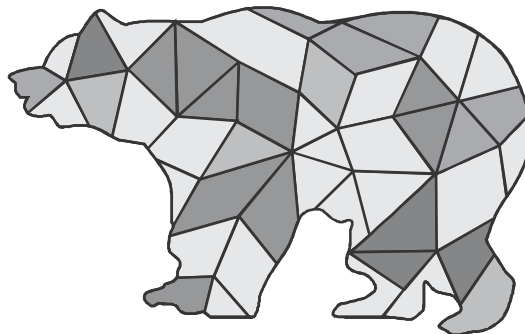


- 9 Group the following into three classes on the basis of their identical features.







- (A) 3, 4, 6; 1, 2, 8; 9, 7, 5 (B) 6, 8, 4; 9, 3, 1; 5, 2, 7
(C) 5, 2, 9; 7, 4, 8; 6, 1, 3 (D) 4, 7, 6; 1, 2, 9; 5, 3, 8

- 10 How many triangles are there in the given figure?



- (A) 10 (B) 18 (C) 5 (D) 12

- 11 In a standard computer keyboard when the numlock is off, the key 7 in the numeric key pad acts as which of the following keys?
(A) PgUp (B) End (C) PgDn (D) Home
- 12 In MS-Paint, which tool is used to draw free hand figures?
(A)  (B)  (C)  (D) 
- 13 By pressing which key we can move to beginning of a page?
(A) Window Key (B) Shift Key
(C) Tab Key (D) Home Key
- 14 Which tool is used to fill the entire picture or an enclosed shape with color in MS-Paint?
(A) Eraser (B) Fill with color
(C) Pencil (D) Color box
- 15 Which key is used to type signs or symbols on the upper half of the key?
(A) Ctrl (B) Pgdn (C) Enter (D) Shift

16

Identify the antonym of 'RARE'.

- (A) Ordinary (B) Common
(C) General (D) Normal

17

Which arrangement of P, Q, R, S and T gives a meaningful sentence?

P - favourite, Q - red, R - my, S - is, T - colour

- (A) R, P, T, S, Q (B) Q, S, T, R, P
(C) S, T, P, R, Q (D) R, T, Q, S, P

18

Which word has the similar meaning as the underlined word?

His success was attained through hard work and dedication.

- (A) contributed (B) received
(C) achieved (D) completed

19

Find the MISSPELT word.

- (A) Deceive (B) Surprise
(C) Guidance (D) Original

20

Which meaningful word is formed using the letters in RENFDI?

- (A) FREIND (B) FRINED
(C) FRINDE (D) FRIEND

