

3rd iRAO 19

International Reasoning & Aptitude Olympiad

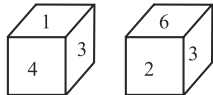






Organized by:
SILVERZONE
FOUNDATION
NEW DELHI - INDIA

In association with:
SILVERZONE FOUNDATION
New Delhi - India
www.silverzone.org

CLASS 7 SAMPLE QUESTIONS

The Actual Question Paper Contains 50 Questions. The Duration of the Test Paper is 60 Minutes.

- Select the pair which is related in the same way as the pair of words given in the question.
Destroy : Construct :: _____ : _____
(A) War : Peace
(B) Father : Son
(C) Soldier : Regiment
(D) Eye : Camera
- Replace the question mark with suitable option.
Month : 30 :: Leap Year : ?
(A) 367 (B) 365
(C) 368 (D) 366
- Seema is the wife of Gopi and Gopi is the brother of Akhil. Akhil is the only uncle of Vijay. What is Vijay's relation with Seema?
(A) Son (B) Nephew
(C) Brother-in-law (D) Brother
- Replace the question mark in the given letter series with the correct option.
U R P M K ?
(A) G (B) E
(C) H (D) F
- Which will be the number at the bottom, if 5 is at the top?

 (i) (ii)
(A) 1 (B) 2
(C) 3 (D) 6
- Select one alternative which exactly matches with the water image of the word given below.
QUARREL
(A)  (B) 
(C)  (D) 
- If 'NSCAIR' is coded as 'RIACSN', then the code for 'CREATE' will be:
(A) AETERC
(B) ETAERC
(C) ETAECR
(D) TEAERC
- A walks 4 km North and turns right and walks 5 km. Then he turns towards South and walks 2 km. Again he turns towards West and walks 3 km and rests. Again he walks 2 km. How far is A now from his initial point?
(A) 16 km
(B) 12 km
(C) 2 km
(D) 4 km
- Suganya went to see a movie nine days ago. She goes to the movies only on Thursday. What day of the week is today?
(A) Tuesday
(B) Thursday
(C) Friday
(D) Saturday
- The mean, median, mode, and range for the following list of values are:
8, 9, 10, 10, 10, 10, 11, 11, 11, 11, 13
(A) 10.5, 10.5, 10, 11
(B) 10.5, 10.4, 10, 5
(C) 10.4, 10.5, 11, 5
(D) 10.5, 10.4, 11, 11

ANSWERS

1. (A) 2. (D) 3. (A) 4. (C) 5. (C) 6. (D) 7. (B) 8. (C) 9. (D) 10. (C)